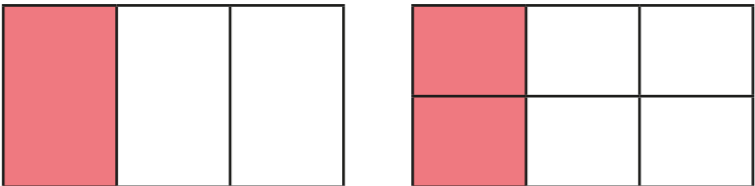
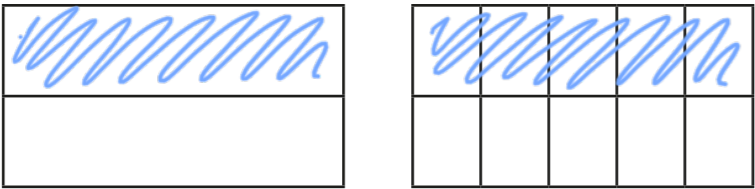


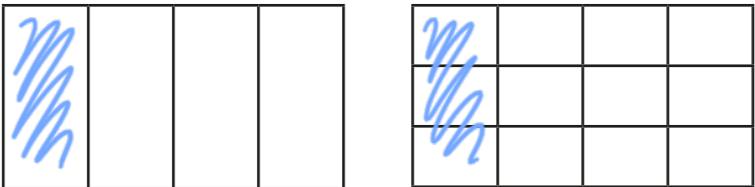
# Equivalent fractions (2)

1 Shade the diagrams to help you complete the equivalent fractions.

The first one has been done for you.

a)   $\frac{1}{3} = \frac{3}{6}$

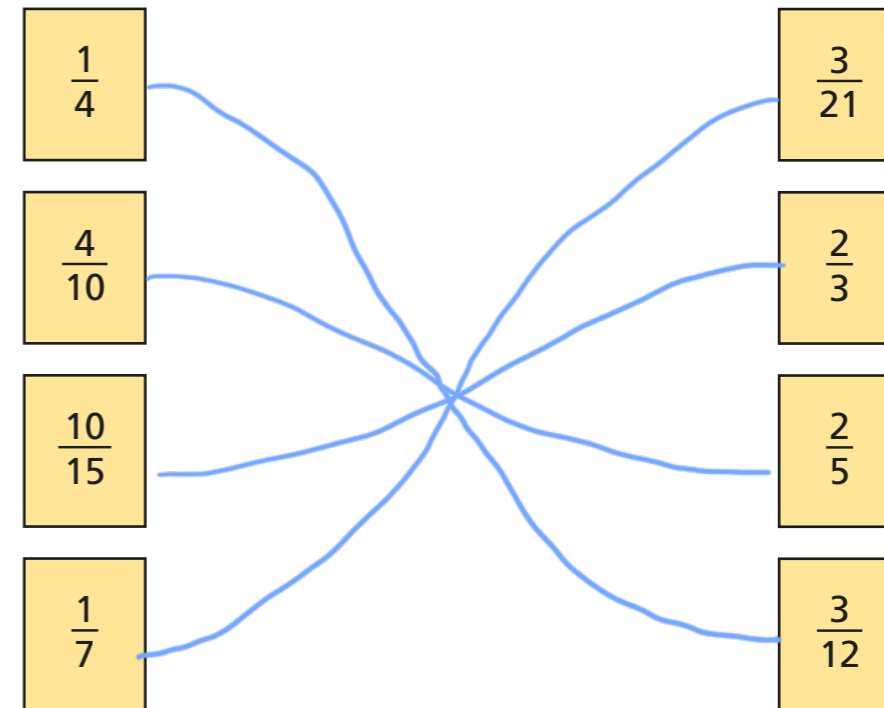
b)   $\frac{1}{2} = \frac{5}{10}$

c)   $\frac{1}{4} = \frac{3}{12}$

2 Draw a diagram to show that  $\frac{3}{4} = \frac{6}{8}$



3 Match the equivalent fractions.



4 Complete the equivalent fractions.

a)  $\frac{1}{5} = \frac{2}{10}$

d)  $\frac{3}{10} = \frac{9}{30}$

g)  $\frac{8}{12} = \frac{2}{3}$

b)  $\frac{4}{5} = \frac{8}{10}$

e)  $\frac{6}{8} = \frac{3}{4}$

h)  $\frac{2}{5} = \frac{10}{25}$

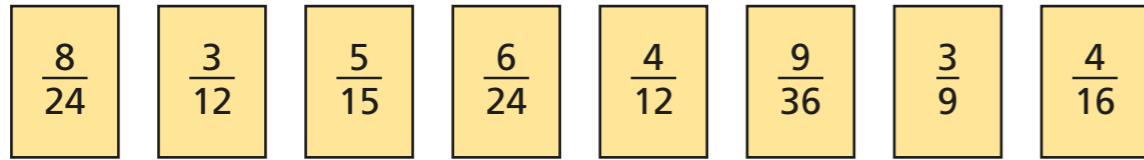
c)  $\frac{3}{10} = \frac{6}{20}$

f)  $\frac{8}{12} = \frac{2}{3}$

i)  $\frac{1}{7} = \frac{4}{28}$



- 5 a) Write the fractions in the correct place on the sorting diagram.



	equivalent to $\frac{1}{3}$	equivalent to $\frac{1}{4}$
odd denominator	$\frac{5}{15}$ $\frac{3}{9}$	
even denominator	$\frac{8}{24}$ $\frac{4}{12}$	$\frac{3}{12}$ $\frac{6}{24}$ $\frac{9}{36}$ $\frac{4}{16}$

- b) Are any of the boxes empty?

Why do you think this is?

Talk about your answer with a partner.



- 6 Find three ways to make the fractions equivalent.  
*Various answers e.g.*

a)  $\frac{2}{2} = \frac{4}{4}$      $\frac{2}{5} = \frac{4}{10}$      $\frac{2}{71} = \frac{4}{142}$


b)  $\frac{1}{5} = \frac{4}{20}$      $\frac{1}{2} = \frac{4}{8}$      $\frac{1}{10} = \frac{4}{40}$

c)  $\frac{2}{3} = \frac{6}{9}$      $\frac{1}{3} = \frac{3}{9}$      $\frac{3}{3} = \frac{9}{9}$


- 7 Eva and Ron have a baguette each.

The baguettes are the same size.

Eva cuts her baguette into 8 equal pieces.



3 of my equal pieces are equal to 6 of Eva's.



How many equal pieces has Ron cut his baguette into?

Eva

Ron

Ron has cut his baguette into 4 equal pieces.

